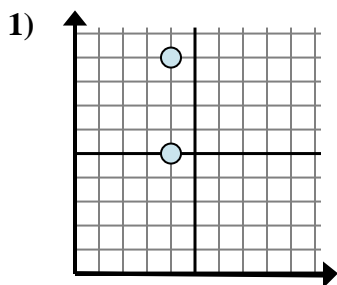


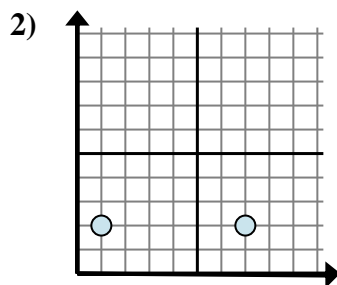


Determine which expression best shows the distance between the two points.

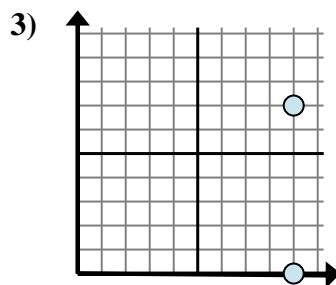
Answers



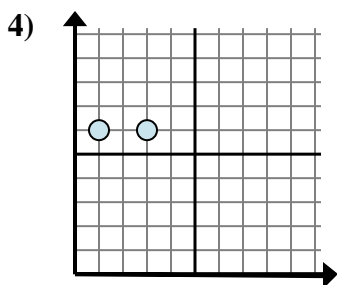
- A. $4 - 5$
- B. $4 - 4$
- C. $9 - 5$
- D. $4 - 4$



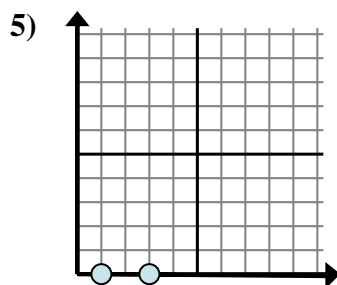
- A. $7 - 2$
- B. $2 - 7$
- C. $1 - 7$
- D. $7 - 1$



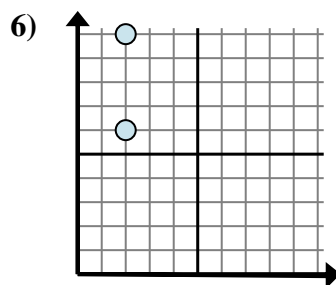
- A. $7 - 0$
- B. $0 - 9$
- C. $9 - 9$
- D. $9 - 7$



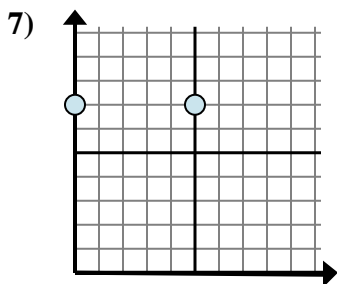
- A. $1 - 3$
- B. $3 - 1$
- C. $6 - 3$
- D. $1 - 6$



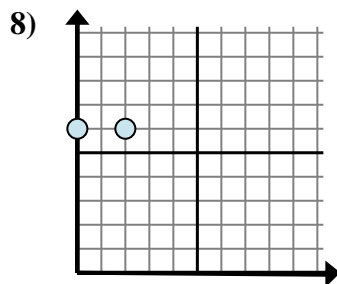
- A. $1 - 3$
- B. $1 - 0$
- C. $3 - 1$
- D. $0 - 3$



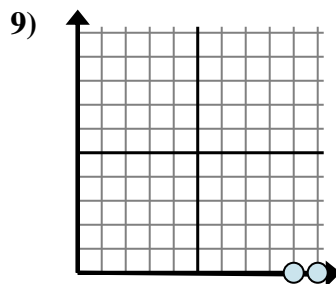
- A. $10 - 2$
- B. $10 - 6$
- C. $2 - 2$
- D. $2 - 6$



- A. $5 - 0$
- B. $5 - 7$
- C. $7 - 0$
- D. $7 - 7$



- A. $0 - 6$
- B. $6 - 0$
- C. $2 - 0$
- D. $6 - 6$

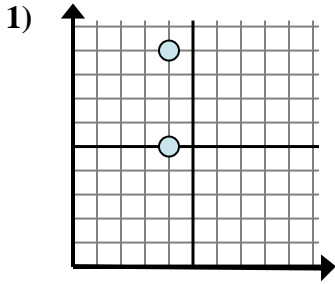


- A. $0 - 9$
- B. $9 - 0$
- C. $10 - 9$
- D. $10 - 0$

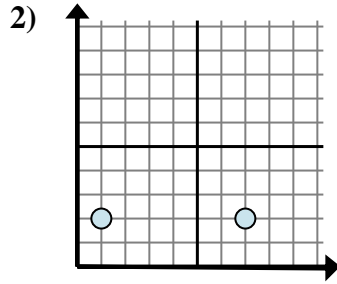
- 1. _____
- 2. _____
- 3. _____
- 4. _____
- 5. _____
- 6. _____
- 7. _____
- 8. _____
- 9. _____



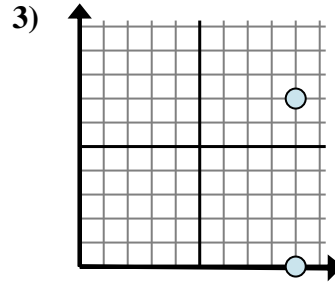
Determine which expression best shows the distance between the two points.



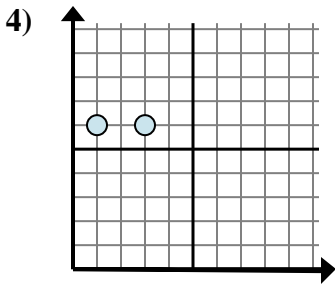
- A. $4 - 5$
- B. $4 - 4$
- C. $9 - 5$
- D. $4 - 4$



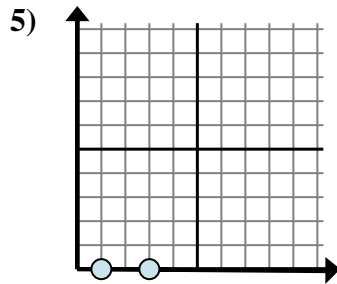
- A. $7 - 2$
- B. $2 - 7$
- C. $1 - 7$
- D. $7 - 1$



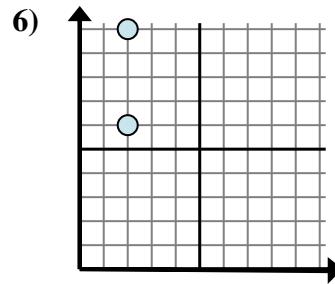
- A. $7 - 0$
- B. $0 - 9$
- C. $9 - 9$
- D. $9 - 7$



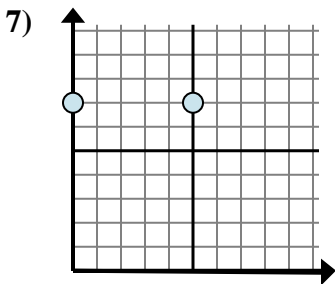
- A. $1 - 3$
- B. $3 - 1$
- C. $6 - 3$
- D. $1 - 6$



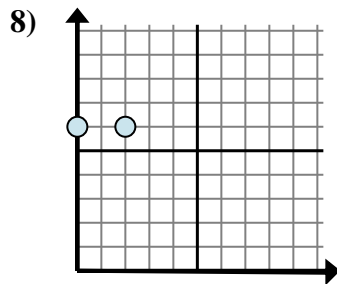
- A. $1 - 3$
- B. $1 - 0$
- C. $3 - 1$
- D. $0 - 3$



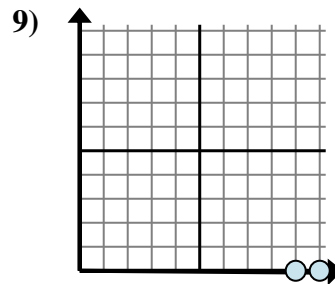
- A. $10 - 2$
- B. $10 - 6$
- C. $2 - 2$
- D. $2 - 6$



- A. $5 - 0$
- B. $5 - 7$
- C. $7 - 0$
- D. $7 - 7$



- A. $0 - 6$
- B. $6 - 0$
- C. $2 - 0$
- D. $6 - 6$



- A. $0 - 9$
- B. $9 - 0$
- C. $10 - 9$
- D. $10 - 0$

Answers

- 1. **C**
- 2. **D**
- 3. **A**
- 4. **B**
- 5. **C**
- 6. **B**
- 7. **A**
- 8. **C**
- 9. **C**